





Maths: Résolution de problèmes.

Chaque indien avait 5 plumes à son bandeau.

Colle dans le carré le nombre de plumes perdues par chacun



8	2	5	1	4	6	3	0
---	---	---	---	---	---	---	---