

Prénom Date

1 Colorie les étiquettes correspondant au nombre de boutons.

$4 + 4 + 4 + 4 + 4 + 4 + 4$


$7 + 7$

7×4

28

4×7

35



$4 + 7 + 4 + 7 + 4 + 7 + 4$

7×7


$4 + 7$

$7 + 7 + 7 + 7$

2 Complète.

$6 \times 4 = 4 \times 6$

..... \times = \times



$6 + \dots = \dots$

..... $+$ =

$4 + \dots = \dots$

..... $+$ =

$6 \times 4 = 4 \times 6 = \dots$

..... \times = \times =

3 Complète les égalités.

$7 \times 3 = 3 \times \dots = \dots + \dots = \dots$

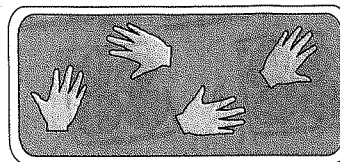
$6 \times 4 = \dots \times \dots = \dots + \dots = \dots$

$12 \times 3 = \dots \times \dots = \dots + \dots = \dots$


$11 \times 4 = \dots \times \dots = \dots + \dots = \dots$

Prénom Date

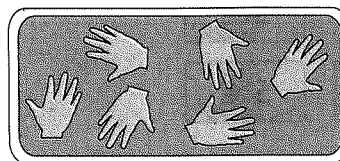
1 Les enfants ont laissé l'empreinte de leurs mains dans le sable. Calcule chaque fois le nombre de doigts.




$5 \times \dots = \dots$



$5 \times \dots = \dots$




$5 \times \dots = \dots$




$5 \times \dots = \dots$

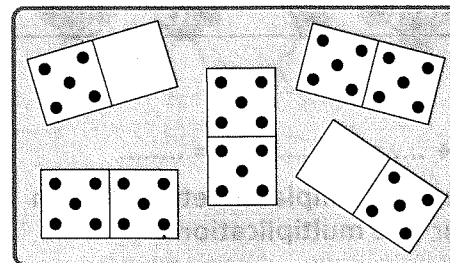
2 Calcule le nombre de points de chaque joueur.



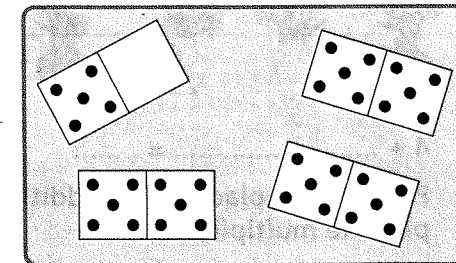
$5 \times \dots = \dots$



$5 \times \dots = \dots$



$5 \times \dots = \dots$



$5 \times \dots = \dots$